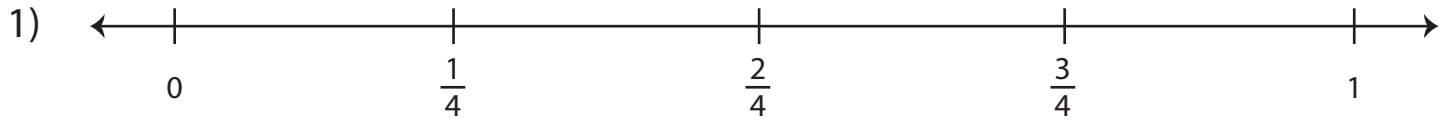


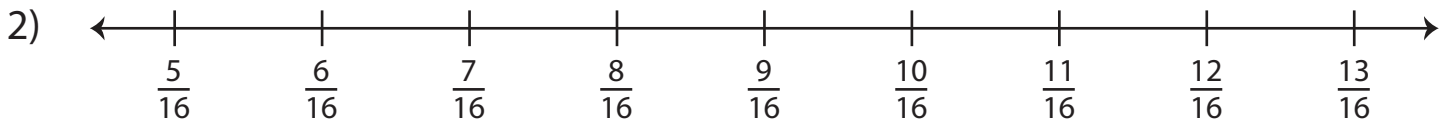
# Comparing Fractions

Locate each pair of fractions on the number lines, and compare them using  $>$ ,  $<$ , or  $=$ .



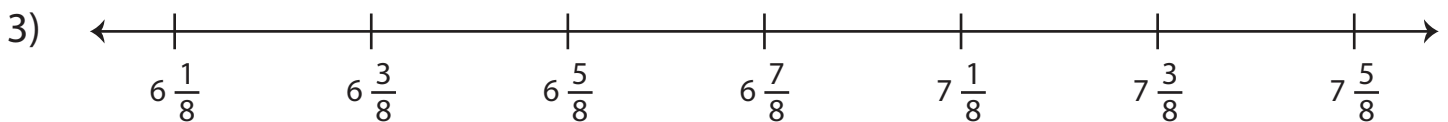
i)  $\frac{3}{4}$    $\frac{1}{4}$

ii)  $\frac{2}{4}$    $\frac{3}{4}$



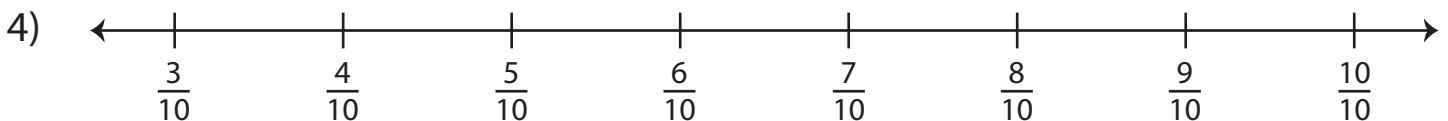
i)  $\frac{7}{16}$    $\frac{7}{16}$

ii)  $\frac{11}{16}$    $\frac{9}{16}$



i)  $6\frac{1}{8}$    $6\frac{5}{8}$

ii)  $7\frac{1}{8}$    $7\frac{1}{8}$



i)  $\frac{4}{10}$    $\frac{7}{10}$

ii)  $\frac{9}{10}$    $\frac{6}{10}$