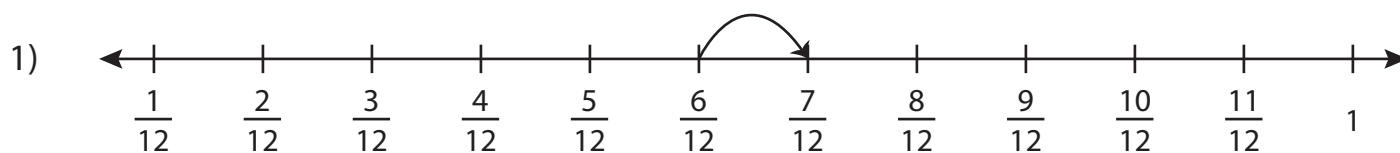


Adding Fractions on a Number Line

Complete the addition sentence that describes each model.



$$\underline{\hspace{2cm}} + \frac{1}{12} = \frac{7}{12}$$

2)

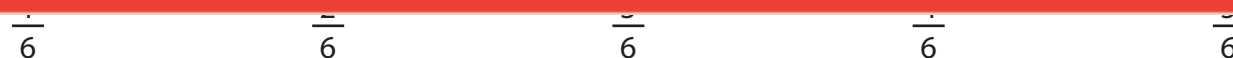
Preview

Become a member to unlock
unrestricted access to both printable
and online worksheets.



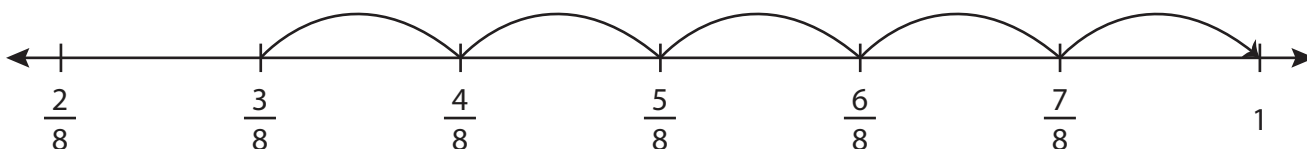
www.tutoringhour.com

3)



$$\frac{2}{6} + \underline{\hspace{2cm}} = \frac{5}{6}$$

5)



$$\underline{\hspace{2cm}} + \frac{5}{8} = 1$$