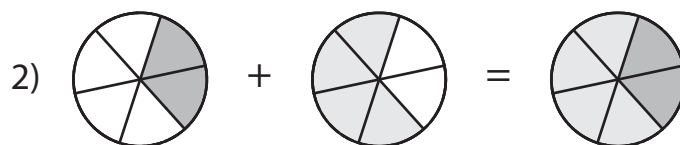
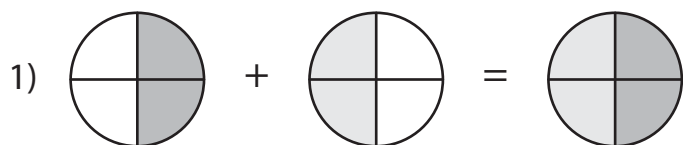


Making a Whole

Observe each pie model and write the addition equation to make a whole.



3)

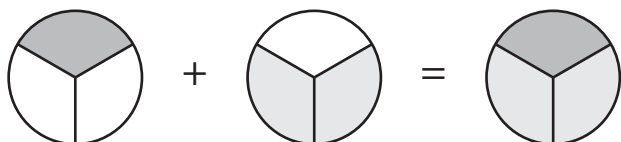
Preview

Become a member to unlock
unrestricted access to both printable
and online worksheets.

www.tutoringhour.com

5)

7)



8)

