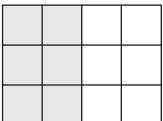


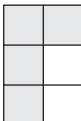




Making a Whole

Observe each fraction model and complete the addition equation to make a whole.

1)  +  = 

2)  +  = 




3)

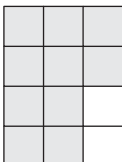
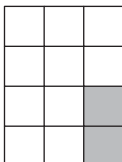
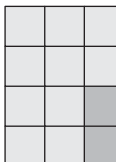
**Become a member to unlock
unrestricted access to both printable
and online worksheets.**




www.tutoringhour.com



5)  +  = 

6)  +  = 

 + $\frac{7}{8}$ = 1

$\frac{10}{12}$ +  = 1