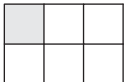


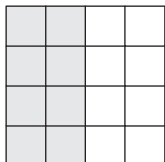




Making a Whole

Observe each fraction model and complete the addition equation to make a whole.

1)  +  = 

2)  +  = 




3)




Become a member to unlock
unrestricted access to both printable
and online worksheets.



www.tutoringhour.com



5)  +  = 

6)  +  = 

$\frac{2}{4} + \text{[]} = 1$

$\text{[]} + \frac{2}{8} = 1$