

Making a Whole

Observe each fraction model and complete the addition equation to make a whole.

1)  +  = 

2)  +  = 



$\frac{1}{2}$ +  = 1  + $\frac{4}{9}$ = 1




3)   = 

Preview

Become a member to unlock
unrestricted access to both printable
and online worksheets.

www.tutoringhour.com

5)  + $\frac{9}{14}$ = 1 $\frac{9}{18}$ +  = 1

7)  +  = 

8)  +  = 

$\frac{4}{19}$ +  = 1  + $\frac{2}{4}$ = 1