







Making a Whole

Observe each fraction model and complete the addition equation to make a whole.

1)  +  = 

2)  +  = 

$\frac{4}{6} + \boxed{} = 1$

$\frac{7}{9} + \boxed{} = 1$

3)

Preview

Become a member to unlock
unrestricted access to both printable
and online worksheets.

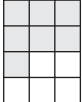


www.tutoringhour.com

5)




$\frac{6}{6} + \boxed{} = 1$

$\frac{4}{4} + \boxed{} = 1$

7)

 +  = 

8)

 +  = 

$\boxed{} + \frac{5}{12} = 1$

$\frac{7}{18} + \boxed{} = 1$