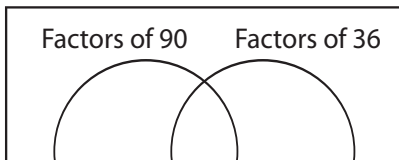


Greatest Common Factor Using Venn Diagrams

Find the greatest common factor of each pair of numbers using the Venn diagram.

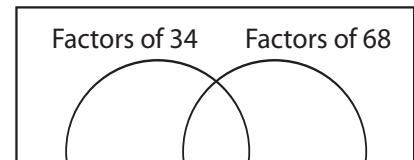
1) 90, 36

a) Complete the Venn diagram.



2) 34, 68

a) Complete the Venn diagram.



3)

Preview

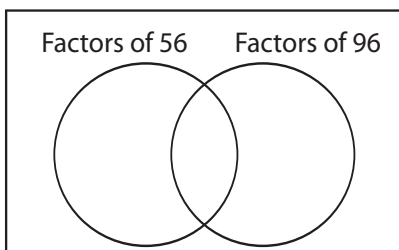
**Become a member to unlock
unrestricted access to both printable
and online worksheets.**



www.tutoringhour.com

5) 56, 96

a) Complete the Venn diagram.

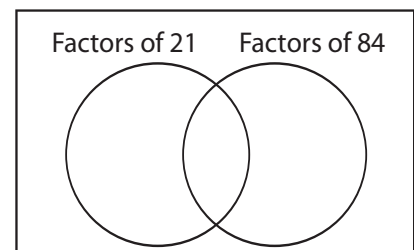


b) Common factors: _____

c) $GCF(56, 96) =$ _____

6) 21, 84

a) Complete the Venn diagram.



b) Common factors: _____

c) $GCF(21, 84) =$ _____