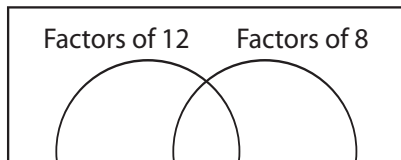


Greatest Common Factor Using Venn Diagrams

Find the greatest common factor of each pair of numbers using the Venn diagram.

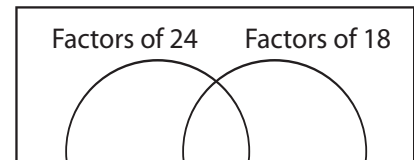
1) 12, 8

a) Complete the Venn diagram.



2) 24, 18

a) Complete the Venn diagram.



3)

Preview

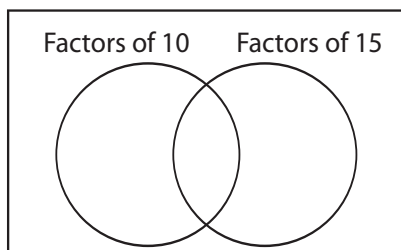
Become a member to unlock
unrestricted access to both printable
and online worksheets.



www.tutoringhour.com

5) 10, 15

a) Complete the Venn diagram.

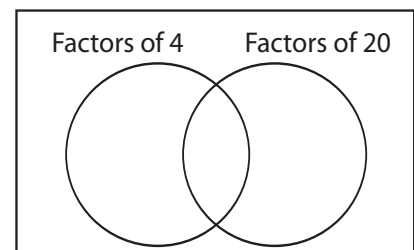


b) Common factors: _____

c) GCF (10, 15) = _____

6) 4, 20

a) Complete the Venn diagram.



b) Common factors: _____

c) GCF (4, 20) = _____