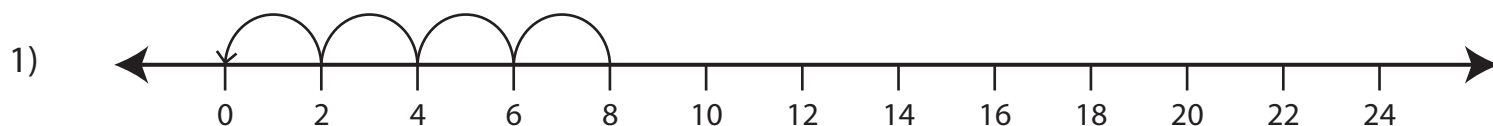


Division Using Number Lines

Choose the division sentence that describes each model.

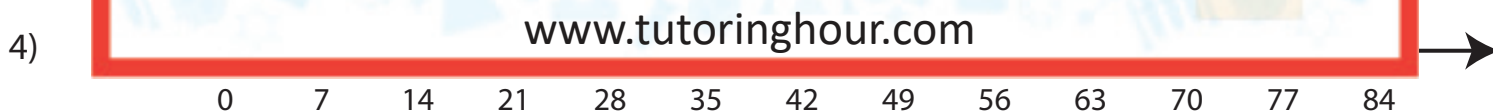



a) $8 \div 4 = 2$

b) $6 \div 2 = 3$

c) $10 \div 2 = 5$

d) $8 \div 2 = 4$



a) $63 \div 7 = 9$

b) $28 \div 4 = 7$

c) $21 \div 3 = 7$

d) $42 \div 7 = 6$



a) $12 \div 2 = 6$

b) $6 \div 2 = 3$

c) $9 \div 3 = 3$

d) $6 \div 3 = 2$