


Equal Groups

- A) Mr. Thompson has 8 jars of jelly. How many boxes of 4 jars each can he make?



Preview

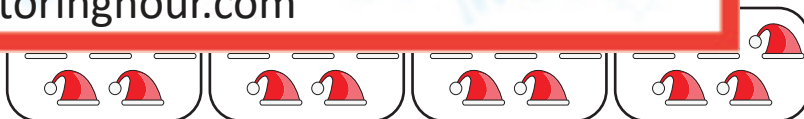
B) Become a member to unlock
unrestricted access to both printable
and online worksheets.



C) www.tutoringhour.com


1) $10 \div 2 = 5$ ●

●



2) $20 \div 5 = 4$ ●

●



3) $21 \div 7 = 3$ ●

●

