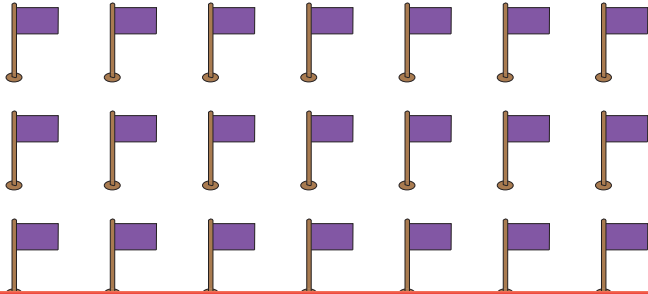


Division with Arrays

- A) Patrick made 21 flags. If he arranges 7 flags in one row, how many such rows of flags will be there?



$$\underline{\quad\quad\quad} \div \underline{\quad\quad\quad} = \underline{\quad\quad\quad}$$

B)

Preview

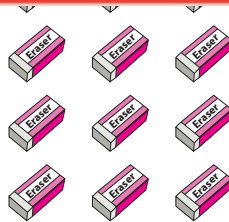
Become a member to unlock
unrestricted access to both printable
and online worksheets.

C)

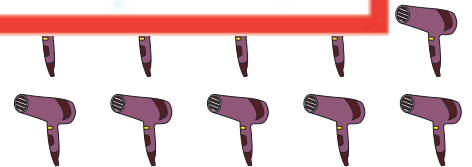
www.tutoringhour.com

1) $15 \div 3 = 5$

a)

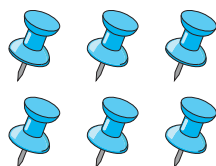


b)



2) $12 \div 6 = 2$

a)



b)

