


Division with Arrays

- A) Peggy has 20 flowers. She needs to arrange them equally in 4 rows. How many flowers will each row have?



$$\underline{\hspace{2cm}} \div \underline{\hspace{2cm}} = \underline{\hspace{2cm}}$$

B)

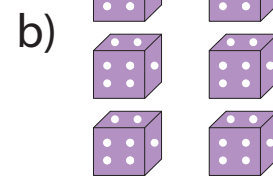

Preview

Become a member to unlock
unrestricted access to both printable
and online worksheets.

C)

www.tutoringhour.com

1) $12 \div 3 = 4$



2) $6 \div 2 = 3$

