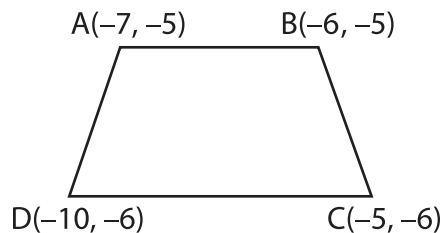
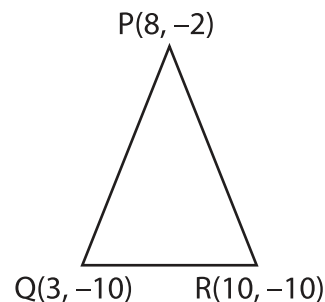


Distance Formula | Finding the Side Lengths

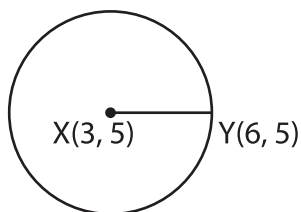
1) Find the length of the side AD.



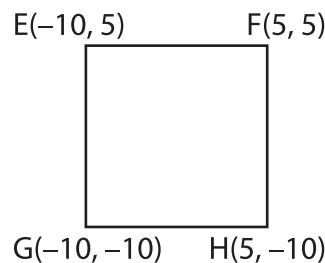
2) Find the length of the side PR.



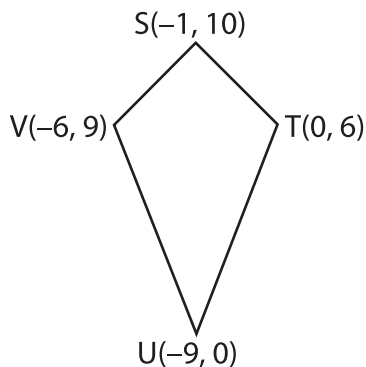
3) Find the radius of the circle.



4) Find the length of the side GH.



5) Find the length of the side ST.



6) Find the length of the side WX.

