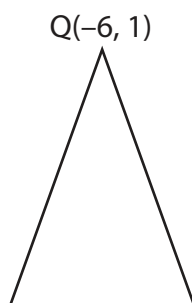
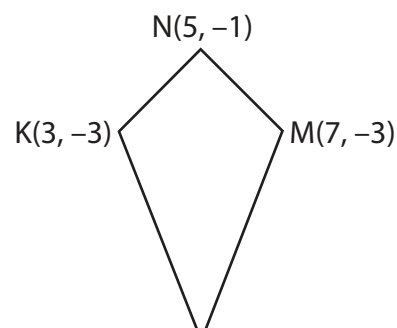


Distance Formula | Finding the Side Lengths

1) Find the length of the side PQ.



2) Find the length of the diagonal NL.



3)

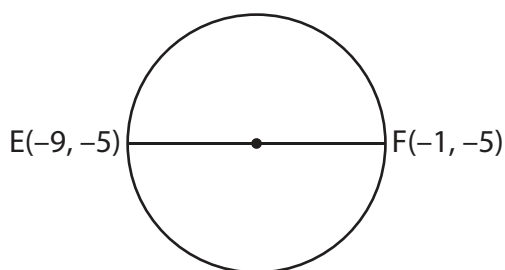
Preview

Become a member to unlock
unrestricted access to both printable
and online worksheets.



www.tutoringhour.com

5) Find the diameter of the circle.



6) Find the length of the side XY.

