

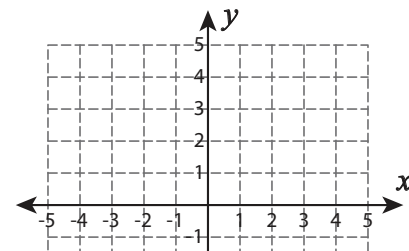
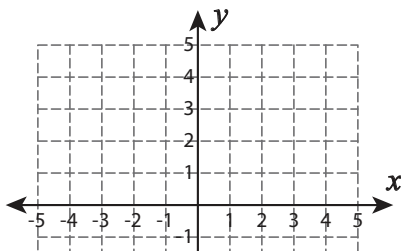
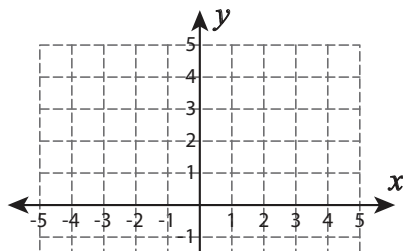
# Perimeter on a Coordinate Plane

Graph the points, join them, and find the perimeter of each shape formed. Round the answer to two decimal places.

1)  $(-5, 0), (-5, 5), (2, 5), (2, 0)$

2)  $(-1, -1), (-1, 1), (1, 1), (3, -3)$

3)  $(-4, -3), (-2, -3), (-1, -2), (-3, -2)$



# Preview

Become a member to unlock  
unrestricted access to both printable  
and online worksheets.

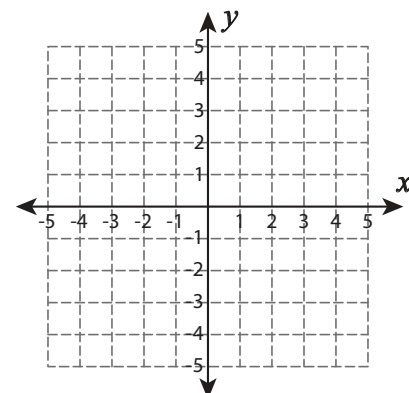
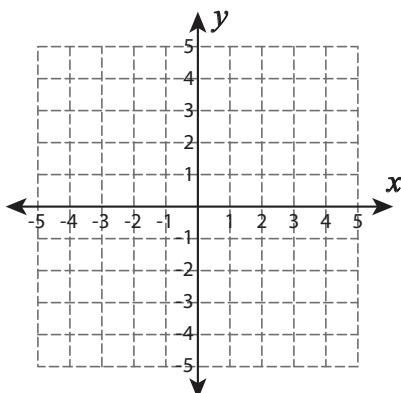
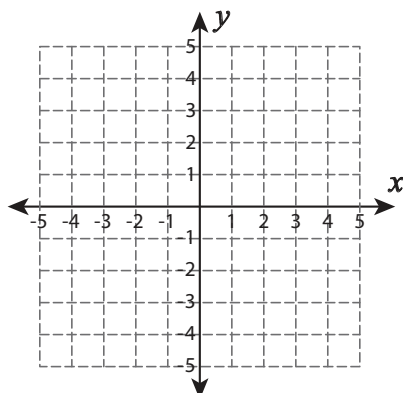


www.tutoringhour.com

4)  $(-4, -2), (-4, 2), (2, 2), (2, -2)$

5)  $(-1, -1), (-1, 1), (1, 1), (3, -3)$

6)  $(-2, 2), (-3, 4), (-4, 4), (-4, 3)$



Perimeter = \_\_\_\_\_

Perimeter = \_\_\_\_\_

Perimeter = \_\_\_\_\_