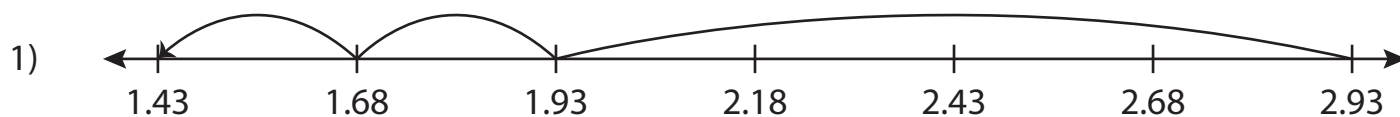
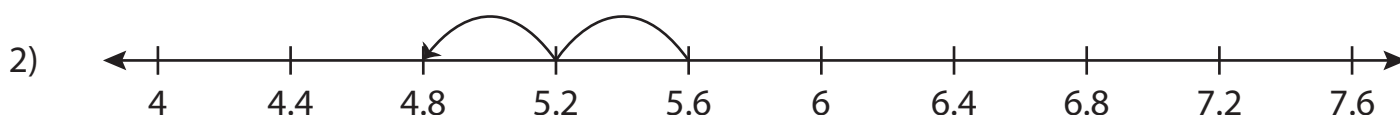


Subtracting Decimals Using Number Lines


Find the difference using numberline.



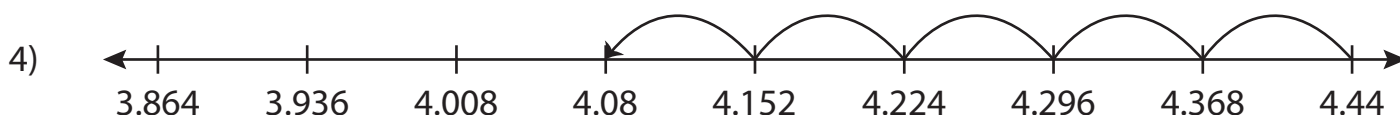
$$2.93 - 1.5 = \underline{\hspace{2cm}}$$



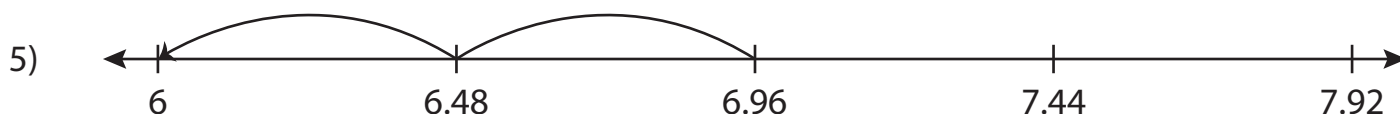
$$5.6 - 0.8 = \underline{\hspace{2cm}}$$



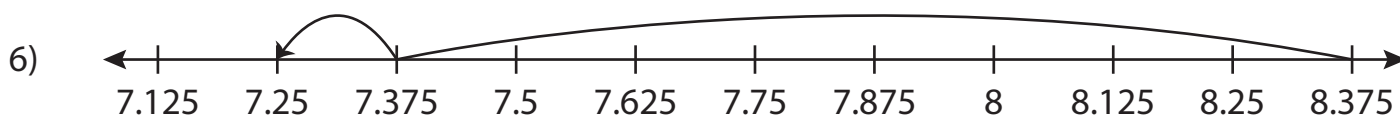
$$10.125 - 0.75 = \underline{\hspace{2cm}}$$



$$4.44 - 0.36 = \underline{\hspace{2cm}}$$



$$6.96 - 0.96 = \underline{\hspace{2cm}}$$



$$8.375 - 1.125 = \underline{\hspace{2cm}}$$