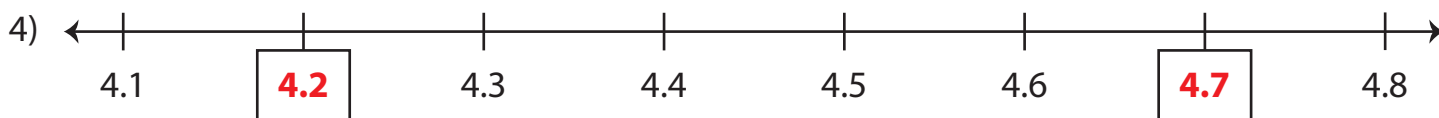
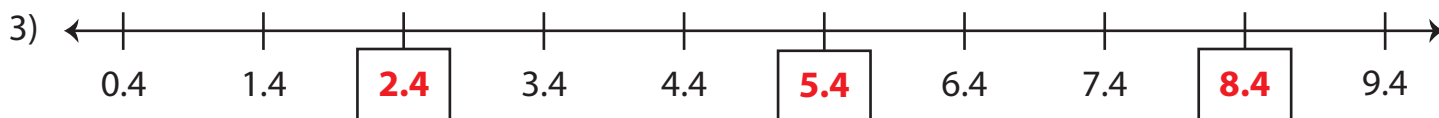
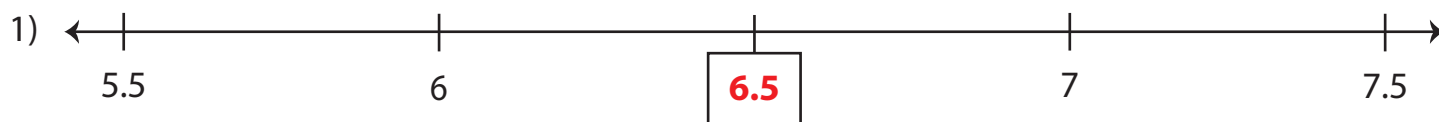


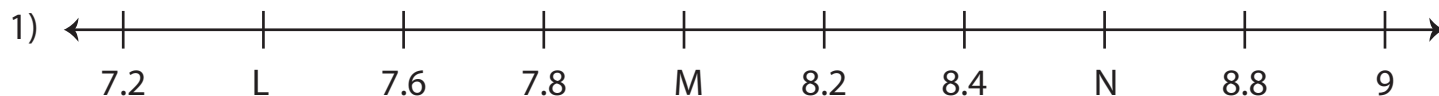
Decimals on a Number Line

Answer Key

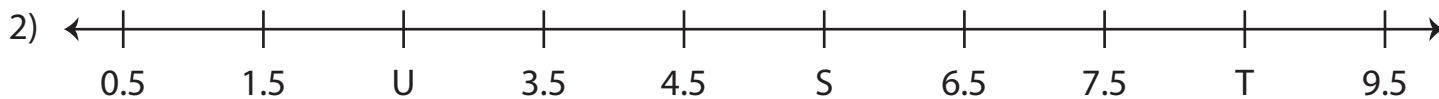
A) Write the missing decimals and complete each number line.



B) What decimal numbers do the letters on each number line represent?



$$L = \underline{7.4} \quad ; \quad M = \underline{8} \quad ; \quad N = \underline{8.6}$$



$$S = \underline{5.5} \quad ; \quad T = \underline{8.5} \quad ; \quad U = \underline{2.5}$$