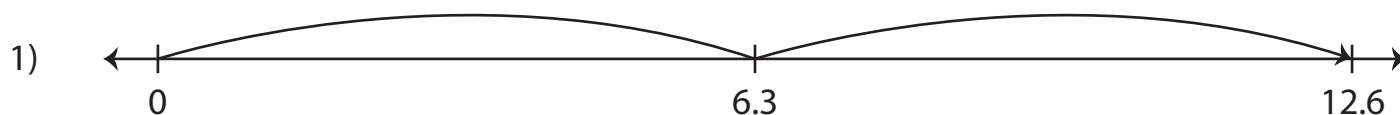


Multiplying Decimals Using Number Lines

Write the multiplication sentence that describes each model.



$$\underline{\hspace{2cm}} \times \underline{\hspace{2cm}} = \underline{\hspace{2cm}}$$

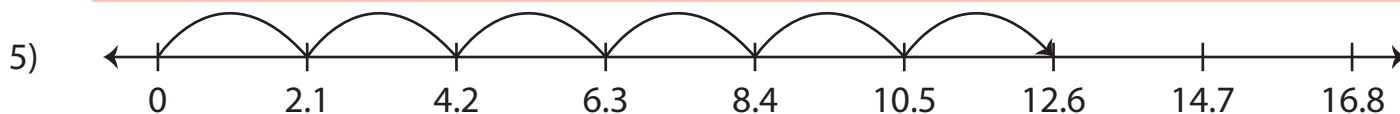


Preview


Become a member to unlock
unrestricted access to both printable
and online worksheets.



www.tutoringhour.com



$$\underline{\hspace{2cm}} \times \underline{\hspace{2cm}} = \underline{\hspace{2cm}}$$



$$\underline{\hspace{2cm}} \times \underline{\hspace{2cm}} = \underline{\hspace{2cm}}$$