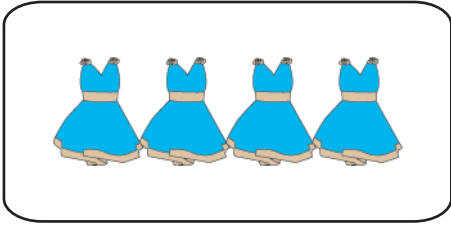
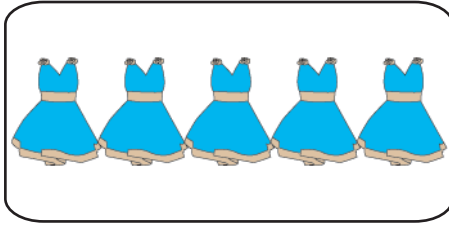


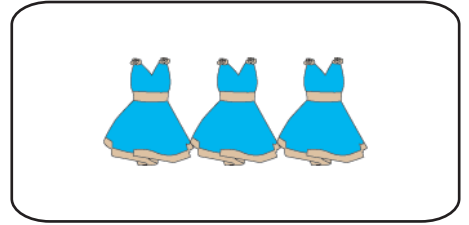
Most vs. Fewest

Write 1 to 3 to order the objects from fewest to most.

1)







2)

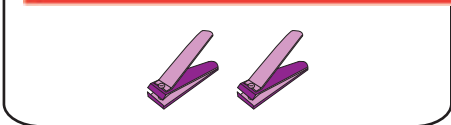
Preview

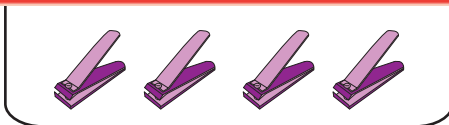
Become a member to unlock
unrestricted access to both printable
and online worksheets.

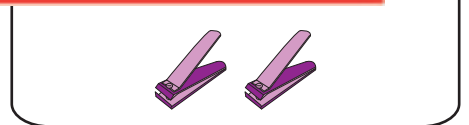
www.tutoringhour.com

3)

4)







5)



