




# Most vs. Fewest

Write 1 to 3 to order the objects from fewest to most.

1)








2)

# Preview

Become a member to unlock  
unrestricted access to both printable  
and online worksheets.

www.tutoringhour.com

3)

4)








5)





