

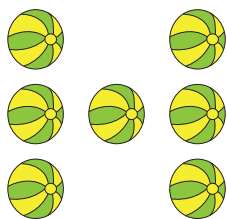


Most vs. Fewest

1) Circle the group with the most balls.



2) Ci

Preview

Become a member to unlock
unrestricted access to both printable
and online worksheets.

3) Ci

www.tutoringhour.com



4) Circle the group with the fewest cups.

