




Most vs. Fewest

- 1) Circle the group with the fewest goslings.



- 2) Ci

Preview

Become a member to unlock
unrestricted access to both printable
and online worksheets.

www.tutoringhour.com

- 3) Ci

- 4) Circle the group with the most Rubik's Cubes.

