




Most vs. Fewest

1) Circle the group with the most carrots.



2) Ci

Preview

Become a member to unlock
unrestricted access to both printable
and online worksheets.

www.tutoringhour.com



3) Ci

4) Circle the group with the fewest bulbs.

