


Counting to 20

Count the number of objects in each set and circle the correct number.

1)



2)




3)

**Become a member to unlock
unrestricted access to both printable
and online worksheets.**

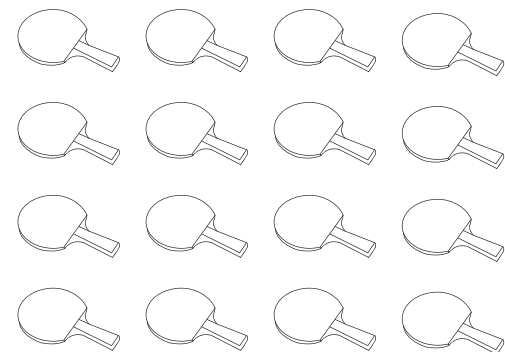


www.tutoringhour.com

5)

**12****13****14****15**

6)

**14****15****16****17**