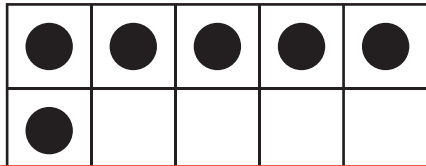





# Comparing Ten Frames

Compare the counters on each pair of ten frames using  $>$ ,  $<$ , or  $=$ .

1)



2)

## Preview

Become a member to unlock  
unrestricted access to both printable  
and online worksheets.



[www.tutoringhour.com](http://www.tutoringhour.com)

3)



4)

