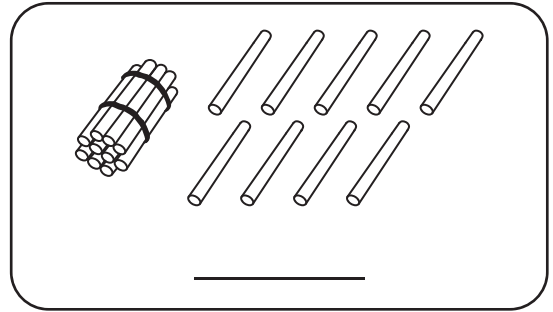
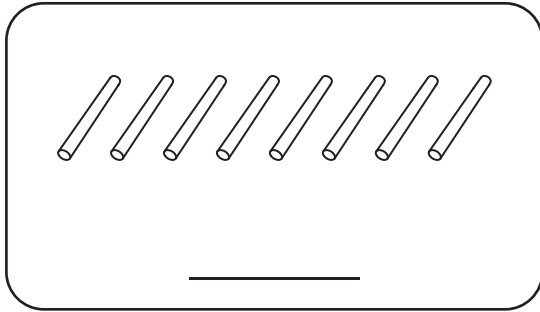


# Comparing Numbers | 1 to 20

Write the number of sticks in each set. Compare each pair using  $>$ ,  $<$ , or  $=$ .

1)



2)

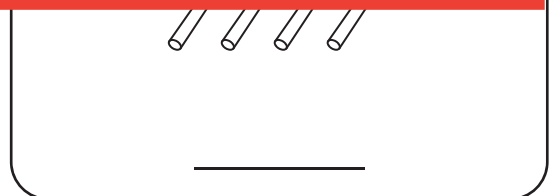
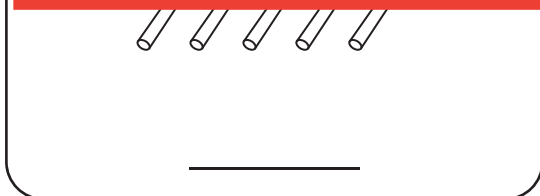
# Preview

Become a member to unlock  
unrestricted access to both printable  
and online worksheets.



www.tutoringhour.com

3)



4)

5)

