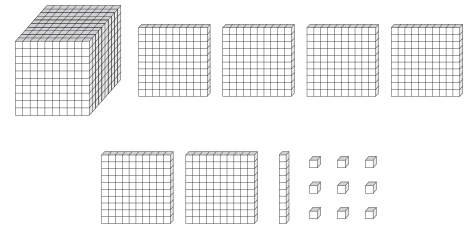

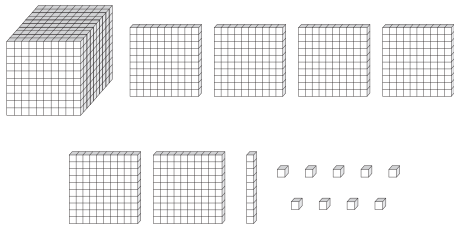


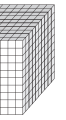
Comparing 4-Digit Numbers | Base Ten Blocks

Count the base ten blocks in each set, and compare using $>$, $<$, or $=$.

1)



2)



Preview

Become a member to unlock
unrestricted access to both printable
and online worksheets.



www.tutoringhour.com

3)

4)

