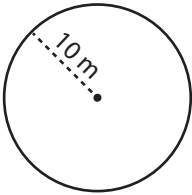


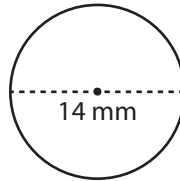
# Radius and Diameter

Find the radius or diameter of each circle.

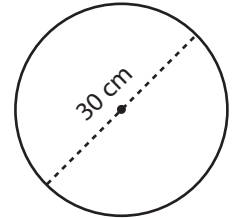
1)



2)



3)



Di

# Preview

4)

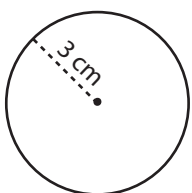
Become a member to unlock  
unrestricted access to both printable  
and online worksheets.

Di

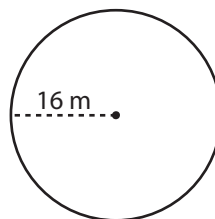
[www.tutoringhour.com](http://www.tutoringhour.com)



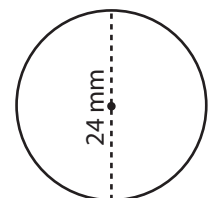
7)



8)



9)



Diameter = \_\_\_\_\_

Diameter = \_\_\_\_\_

Radius = \_\_\_\_\_