


Radius and Diameter

Count the squares and estimate the radius or diameter of the circle in each grid.

1) scale: 

2) scale: 

3) scale: 

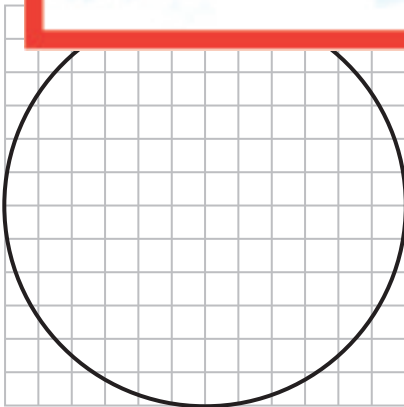
Preview

Become a member to unlock
unrestricted access to both printable
and online worksheets.

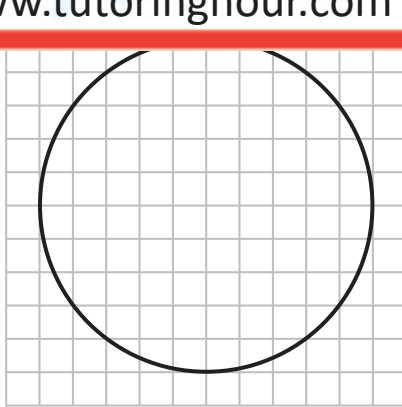
www.tutoringhour.com



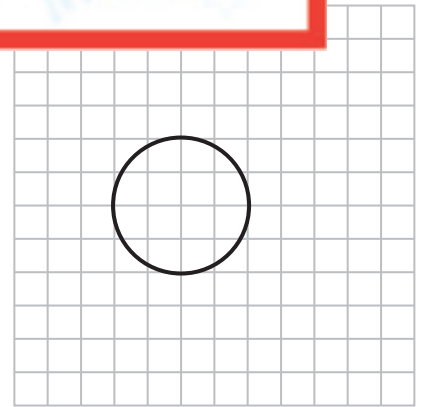
4) scale:



Radius = _____



Diameter = _____



Diameter = _____