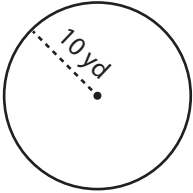


# Radius and Diameter

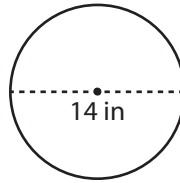
Find the radius or diameter of each circle.

1)



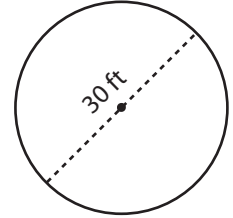
Diameter = \_\_\_\_\_

2)



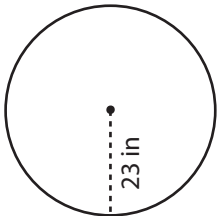
Radius = \_\_\_\_\_

3)



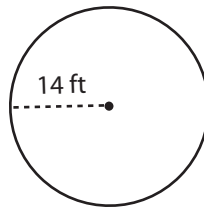
Radius = \_\_\_\_\_

4)



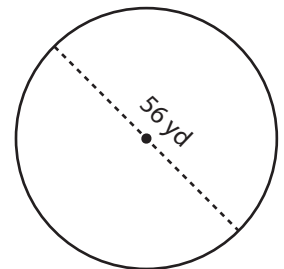
Diameter = \_\_\_\_\_

5)



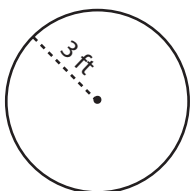
Diameter = \_\_\_\_\_

6)



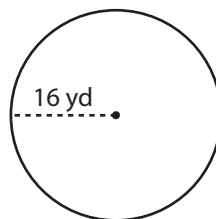
Radius = \_\_\_\_\_

7)



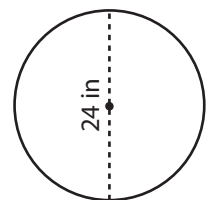
Diameter = \_\_\_\_\_

8)



Diameter = \_\_\_\_\_

9)



Radius = \_\_\_\_\_