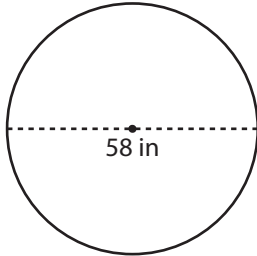


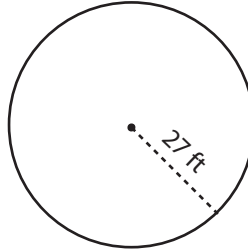
Radius and Diameter

Find the radius or diameter of each circle.

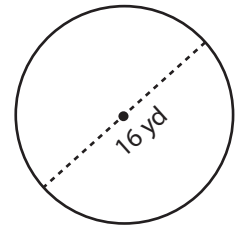
1)



2)



3)



4)

Preview

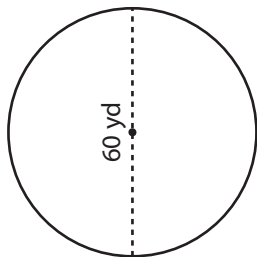
Become a member to unlock
unrestricted access to both printable
and online worksheets.



Diameter = _____

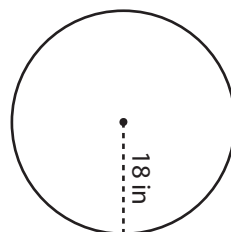
www.tutoringhour.com

7)



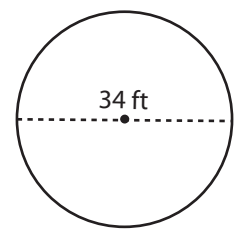
Radius = _____

8)



Diameter = _____

9)



Radius = _____