

Radius and Diameter

Count the squares and estimate the radius or diameter of the circle in each grid.

1) scale: $\begin{array}{c} 6 \text{ ft} \\ \square \\ 6 \text{ ft} \end{array}$

2) scale: $\begin{array}{c} 4 \text{ yd} \\ \square \\ 4 \text{ yd} \end{array}$

3) scale: $\begin{array}{c} 2 \text{ in} \\ \square \\ 2 \text{ in} \end{array}$

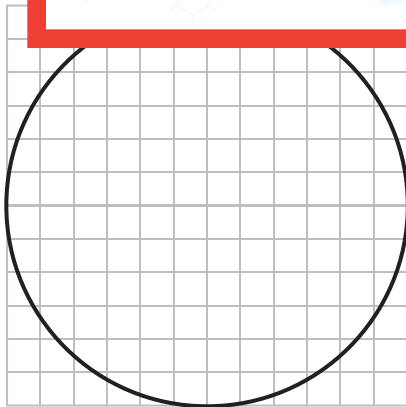
Preview

Become a member to unlock
unrestricted access to both printable
and online worksheets.

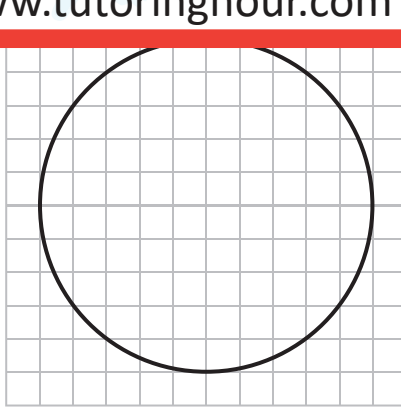


www.tutoringhour.com

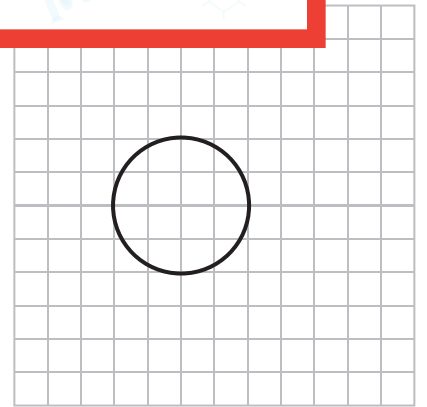
4) scale:



Radius = _____



Diameter = _____



Diameter = _____