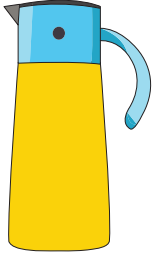
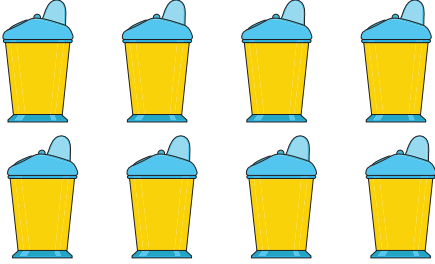



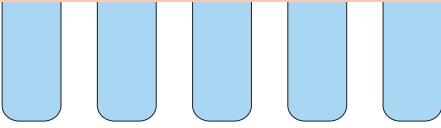

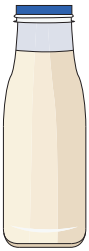
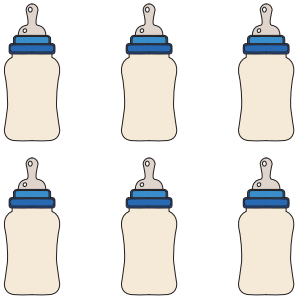



# Capacity | Metric Units

Write the capacity of each individual container.

1)	 4 L	 =	 = _____ mL
2)	<div style="border: 2px solid red; padding: 10px;"> <h2 style="color: blue;">Preview</h2> <p style="color: blue; font-weight: bold;">Become a member to unlock unrestricted access to both printable and online worksheets.</p> <p style="color: blue;">www.tutoringhour.com</p>  </div>		
3)			
4)	 10 L	 =	 = _____ L
5)	 900 mL	 =	 = _____ mL