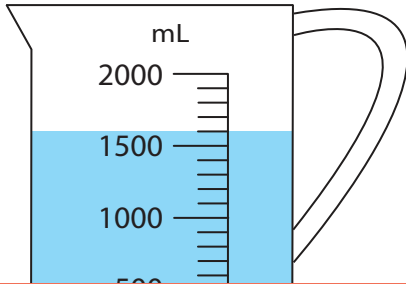


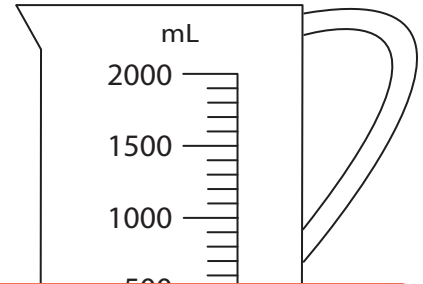
# Reading Measuring Jugs

Write the reading shown on each measuring jug.

1)



2)



4)

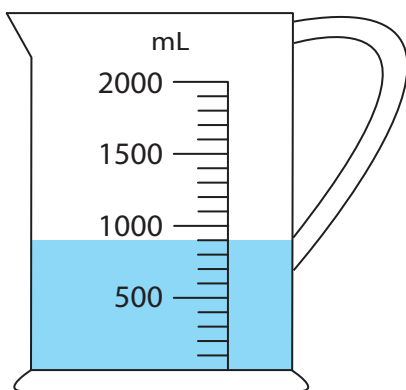
## Preview

Become a member to unlock  
unrestricted access to both printable  
and online worksheets.



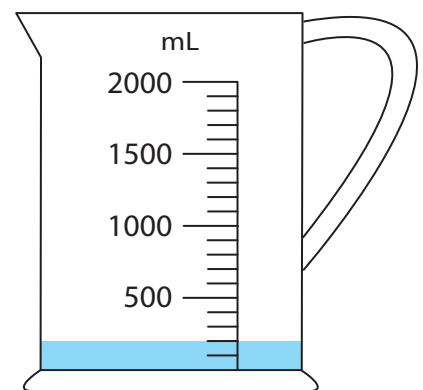
[www.tutoringhour.com](http://www.tutoringhour.com)

7)



\_\_\_\_\_ mL

8)



\_\_\_\_\_ mL