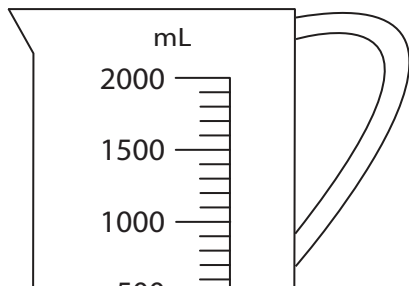


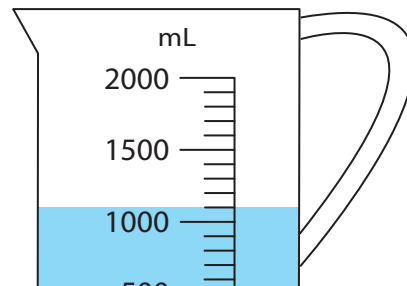
Reading Measuring Jugs

Write the reading shown on each measuring jug.

1)



2)



4)

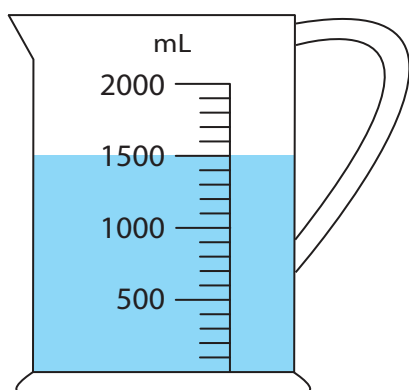
Preview

Become a member to unlock
unrestricted access to both printable
and online worksheets.



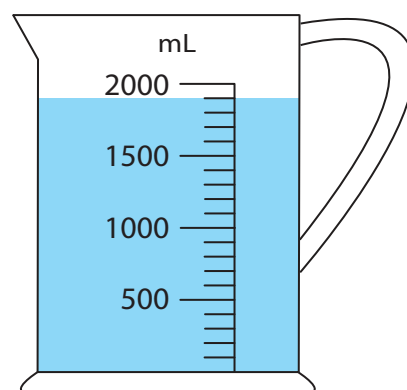
www.tutoringhour.com

7)



_____ mL

8)



_____ mL