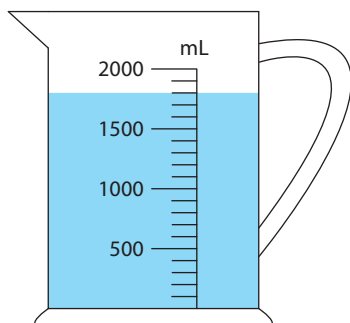


Measuring Jugs

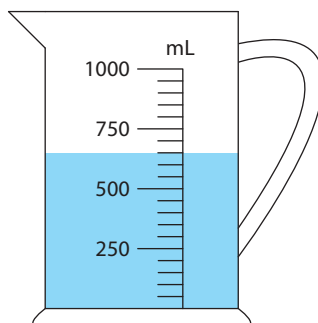
1) How much water should you pour out from each jug to drop the water level to 500 mL?

a)



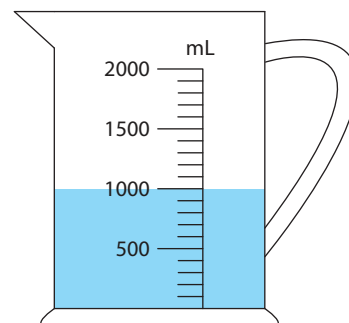
_____ mL

b)



_____ mL

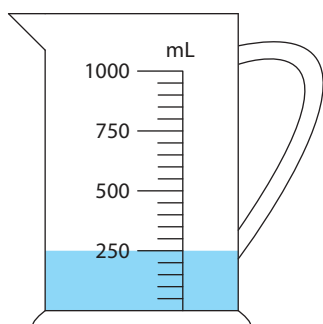
c)



_____ mL

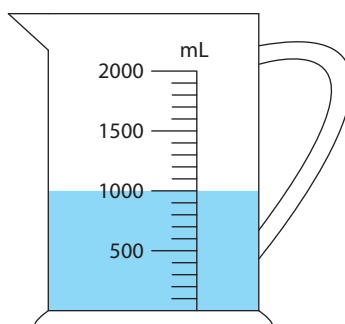
2) If you add 700 mL of water to each jug, what would the new reading be?

a)



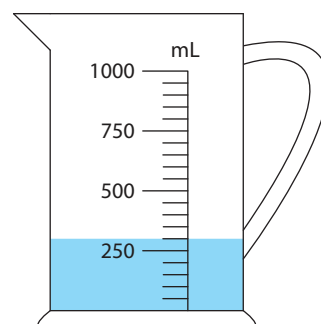
_____ mL

b)



_____ mL

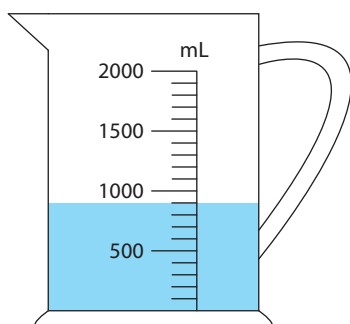
c)



_____ mL

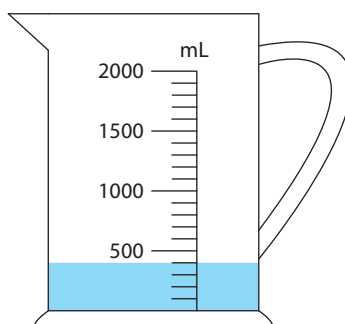
3) How much water is required to fill each jug up to 1000 mL?

a)



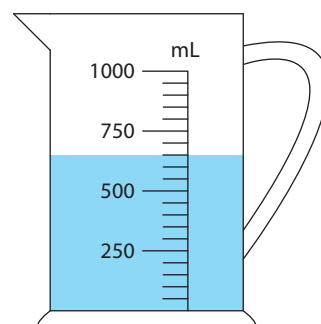
_____ mL

b)



_____ mL

c)



_____ mL