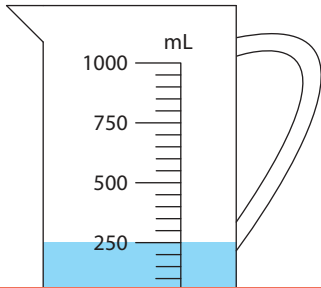


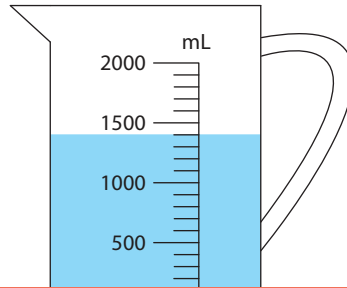
# Measuring Jugs

1) If you add 600 mL of water to each jug, what would the new reading be?

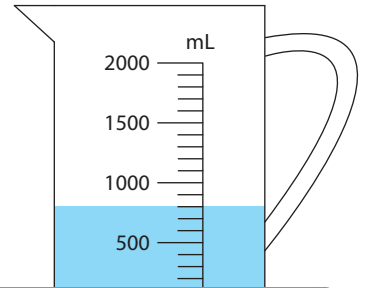
a)



b)



c)



## Preview

2) Ho

a)

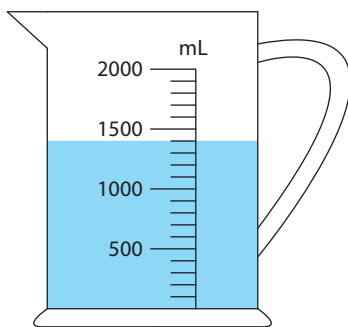
**Become a member to unlock  
unrestricted access to both printable  
and online worksheets.**



[www.tutoringhour.com](http://www.tutoringhour.com)

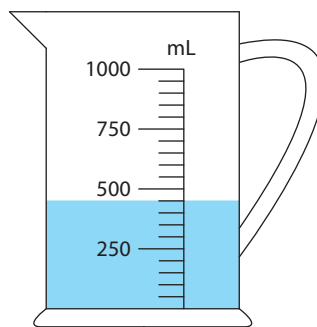
3) How much water should you pour out from each jug to drop the water level to 200 mL?

a)



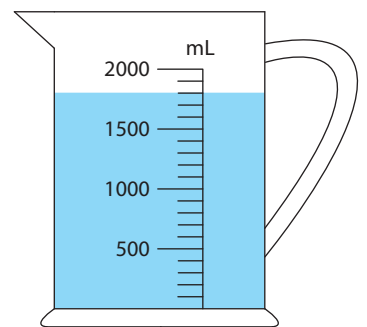
\_\_\_\_\_ mL

b)



\_\_\_\_\_ mL

c)



\_\_\_\_\_ mL