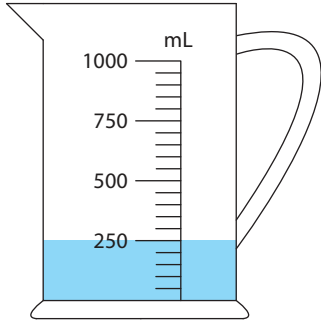


Measuring Jugs

Answer Key

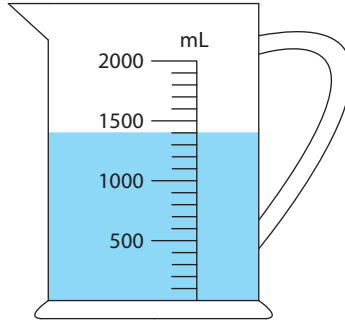
1) If you add 600 mL of water to each jug, what would the new reading be?

a)



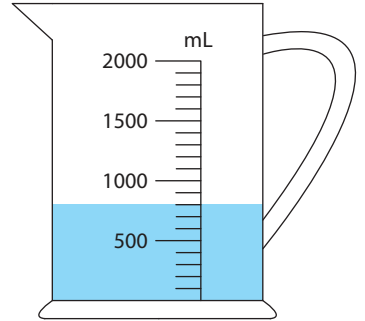
850 mL

b)



2000 mL

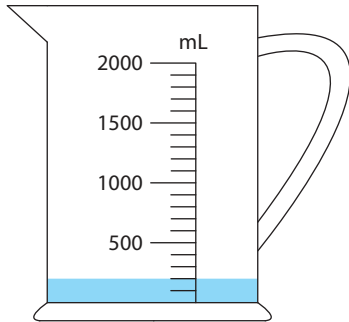
c)



1400 mL

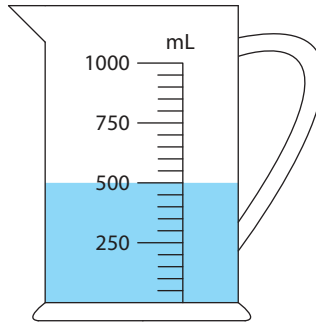
2) How much water is required to fill each jug up to 800 mL?

a)



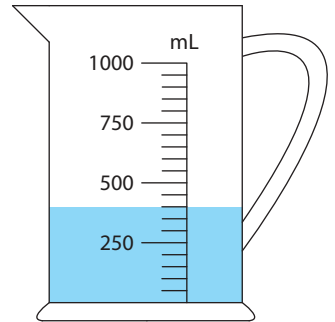
600 mL

b)



300 mL

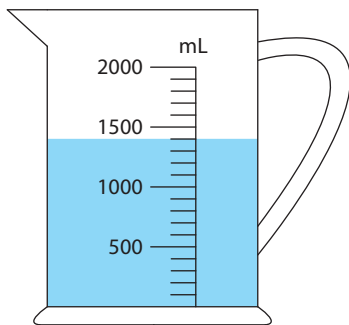
c)



400 mL

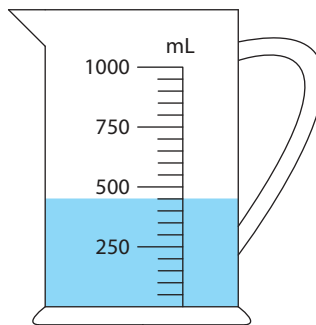
3) How much water should you pour out from each jug to drop the water level to 200 mL?

a)



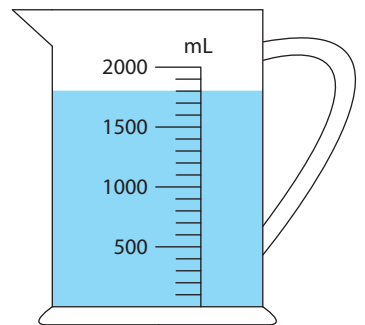
1200 mL

b)



250 mL

c)



1600 mL