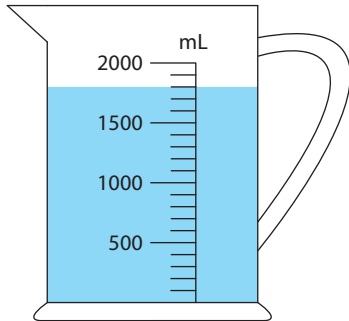


Measuring Jugs

Answer Key

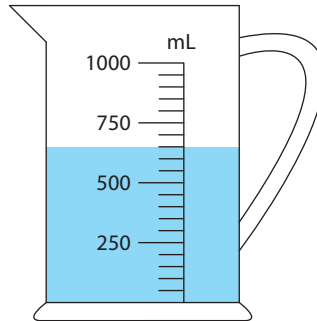
1) How much water should you pour out from each jug to drop the water level to 500 mL?

a)



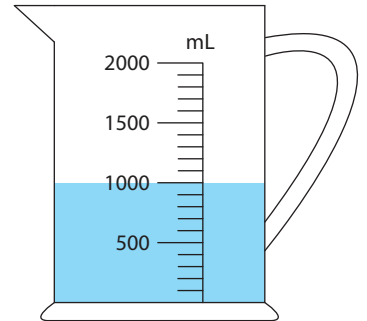
1300 mL

b)



150 mL

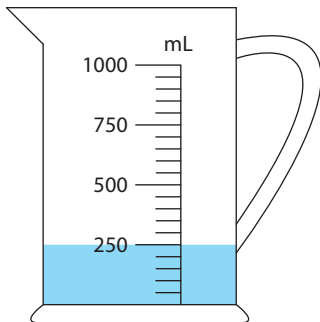
c)



500 mL

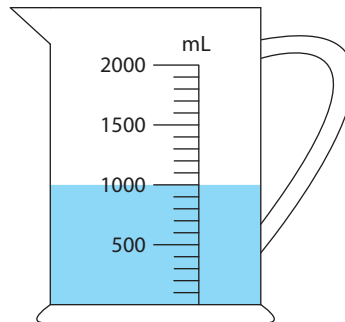
2) If you add 700 mL of water to each jug, what would the new reading be?

a)



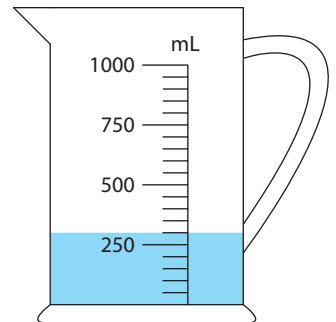
950 mL

b)



1700 mL

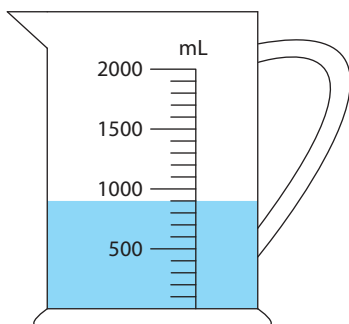
c)



1000 mL

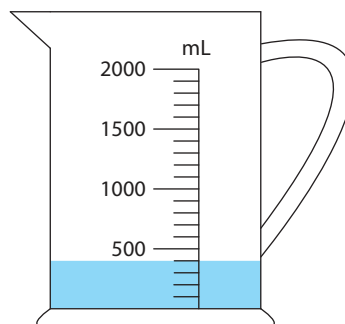
3) How much water is required to fill each jug up to 1000 mL?

a)



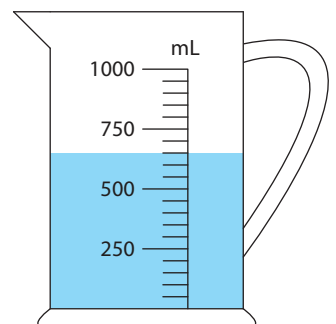
100 mL

b)



600 mL

c)



350 mL