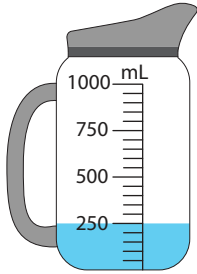


# Capacity

A) Match each jug with the container whose volume corresponds to the liquid level in the jug.

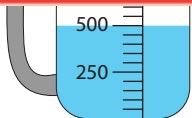


## Preview

Become a member to unlock  
unrestricted access to both printable  
and online worksheets.

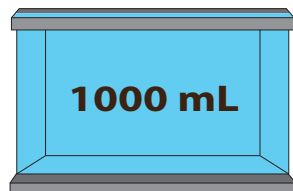
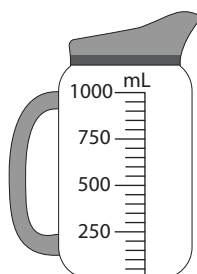


[www.tutoringhour.com](http://www.tutoringhour.com)



B) Shade each jug to indicate the level when liquid from the other container is poured into it.

1)



2)

