


Comparing Liquid Volumes

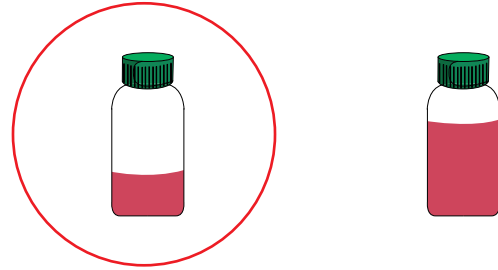
Answer Key

A) Compare the liquid volume of each container and circle the appropriate one as indicated.

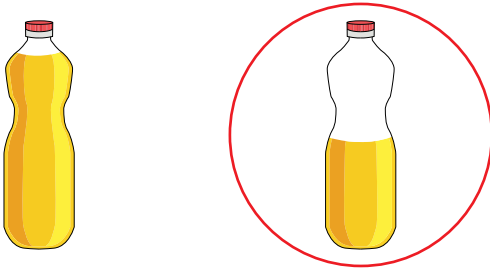
1) Which teapot has more tea?




2) Which bottle has less syrup?



3) Which bottle has less oil?



4) Which glass has more juice?



B) Fishbowl C has more water than the fishbowl B but less than the fishbowl A. Check whether the statement is true or false.



A



B



C

True

False

C) Compare the liquid volumes and complete the sentences.



A



B



C

Sipper A contains more milk than C.

Sipper C contains less milk than B.

Sipper B contains less milk than A.