


# Comparing Liquid Volumes

Answer Key

A) Compare the liquid volume of each container and circle the appropriate one as indicated.

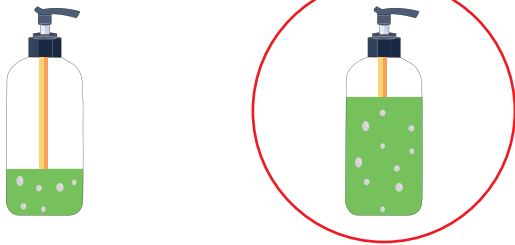
1) Which glass has less juice?



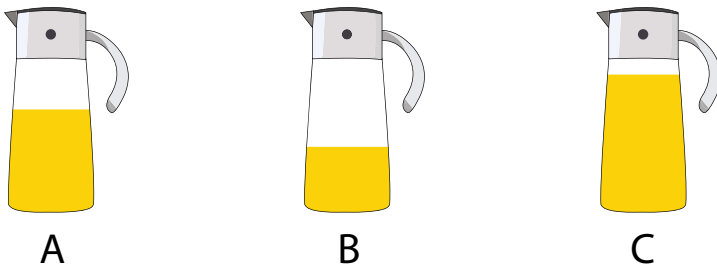
2) Which mug has more coffee?



3) Which dispenser has more handwash? 4) Which bottle has less milk?



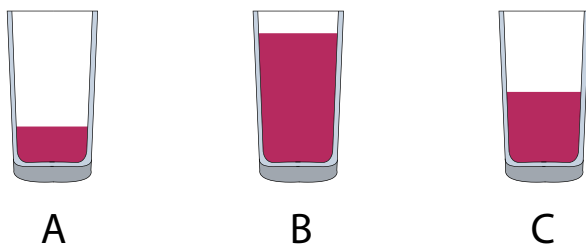
B) Container A has less oil than container C but more than container B. Check whether the statement is true or false.



True

False

C) Compare the liquid volumes and complete the sentences.



Glass A contains less juice than B.

Glass B contains more juice than C.

Glass C contains more juice than A.