



# Estimating Capacity | Metric Units

A) Choose an appropriate capacity unit for each container.

1)

	<input type="checkbox"/> L
	<input type="checkbox"/> mL

2)


	<input type="checkbox"/> L
	<input type="checkbox"/> mL

3)

# Preview

Become a member to unlock  
unrestricted access to both printable  
and online worksheets.

www.tutoringhour.com



		water tank
--	--	------------

B) S

C) Complete each sentence with an appropriate unit of capacity.

- 1) Alex poured 750 \_\_\_\_\_ (liters/milliliters) of lemonade into his jug.
- 2) Julia filled 50 \_\_\_\_\_ (liters/milliliters) of water in the aquarium.
- 3) Olivia added 30 \_\_\_\_\_ (liters/milliliters) of oil to the skillet to sauté vegetables for dinner.