

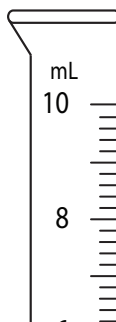
Reading Graduated Cylinders

Write the reading shown on each graduated cylinder.

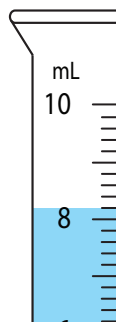
1)



2)



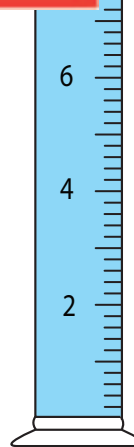
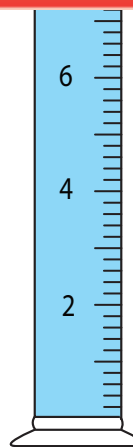
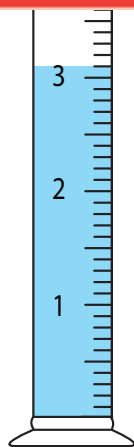
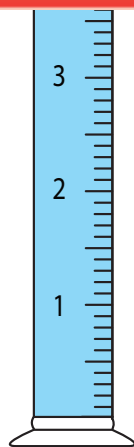
3)



4)



5)



_____ mL

_____ mL

_____ mL

_____ mL

Preview

Become a member to unlock
unrestricted access to both printable
and online worksheets.



www.tutoringhour.com