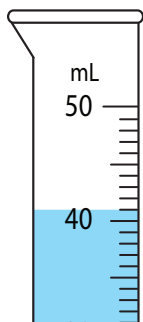


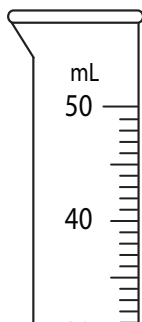
Reading Graduated Cylinders

Write the reading shown on each graduated cylinder.

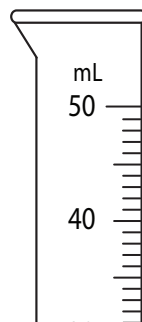
1)



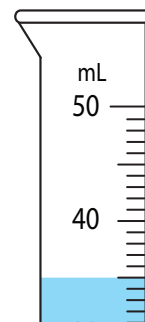
2)



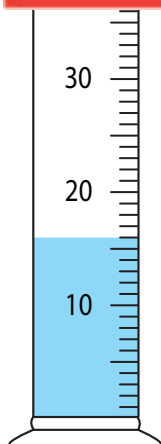
3)



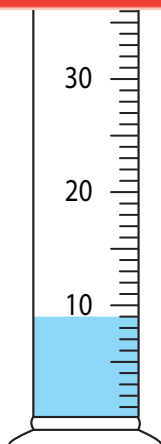
4)



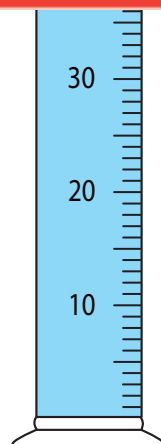
5)



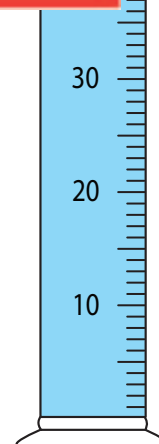
_____ mL



_____ mL



_____ mL



_____ mL

Preview

Become a member to unlock
unrestricted access to both printable
and online worksheets.



www.tutoringhour.com