


# Comparing Liquid Volumes

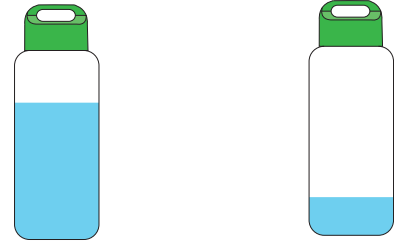
A) Compare the liquid volumes of the containers and label them as "more" or "less".

1)





2)





B) S

1) C

C


## Preview


Become a member to unlock  
unrestricted access to both printable  
and online worksheets.


www.tutoringhour.com



C) 1








2) Write 1, 2, and 3 to order the cups from most to least based on the volume of tea they contain.





