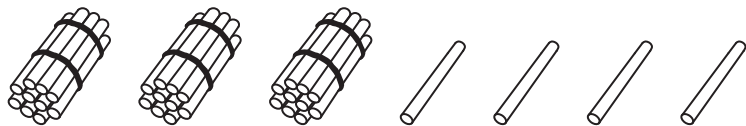


Bundles of Tens and Ones

Each bundle has 10 sticks. Count the sticks, and write how many tens, ones, and how many in all.

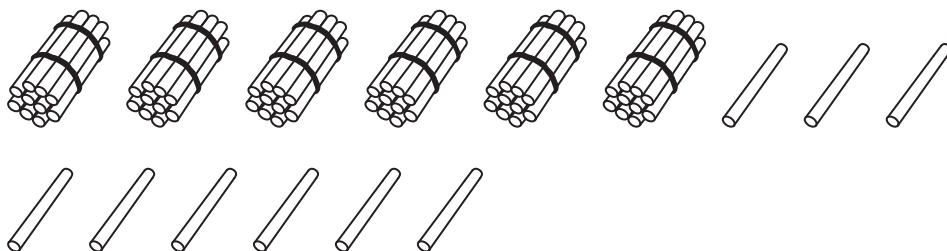
1)



Tens	Ones

Total number of sticks = _____

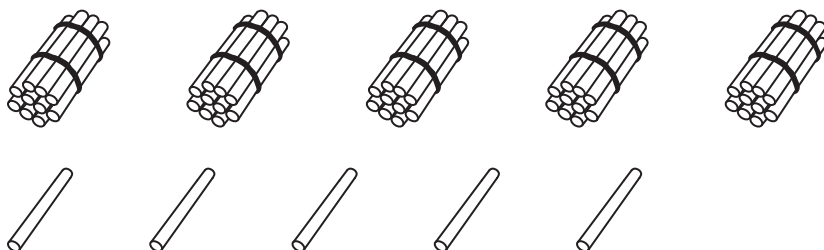
2)



Tens	Ones

Total number of sticks = _____

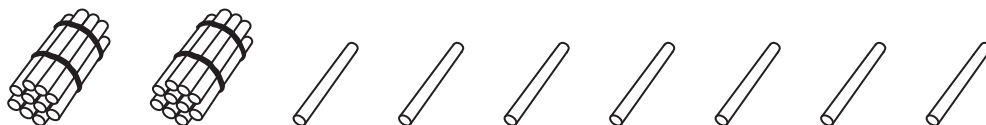
3)



Tens	Ones

Total number of sticks = _____

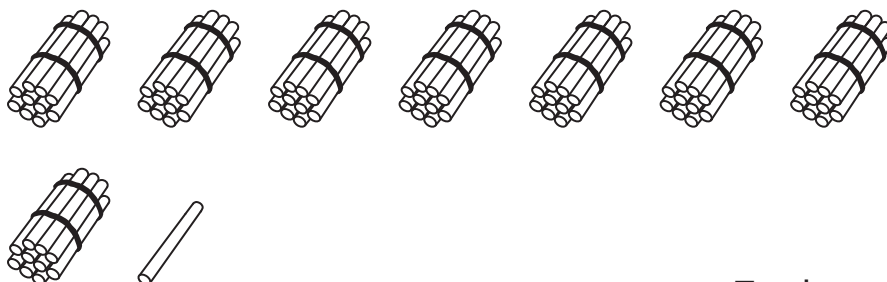
4)



Tens	Ones

Total number of sticks = _____

5)



Tens	Ones

Total number of sticks = _____