



Big vs. Small

A) Write 1, 2, and 3 to order the objects from smallest to biggest.

1)







2)

Preview

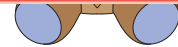
Become a member to unlock
unrestricted access to both printable
and online worksheets.

B) V

1)







2)

