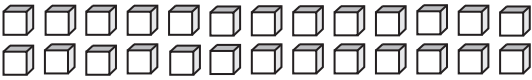
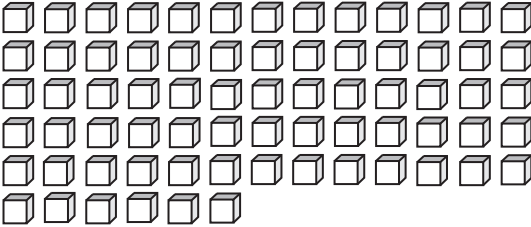
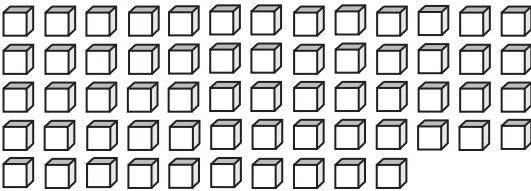
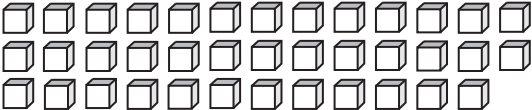
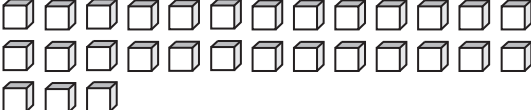
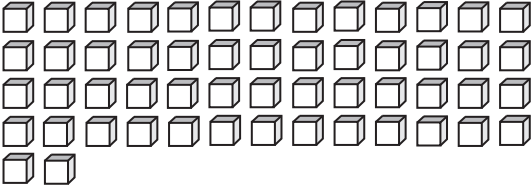


Base Ten Blocks

Count the base ten blocks. Write the number of tens that can be formed and the left over ones.

<p>1)</p>  <p>_____ tens _____ ones</p>	<p>2)</p>  <p>_____ tens _____ ones</p>
<p>3)</p>  <p>_____ tens _____ ones</p>	<p>4)</p>  <p>_____ tens _____ ones</p>
<p>5)</p>  <p>_____ tens _____ ones</p>	<p>6)</p>  <p>_____ tens _____ ones</p>
<p>7)</p>  <p>_____ tens _____ ones</p>	<p>8)</p>  <p>_____ tens _____ ones</p>